

Name : \_\_\_\_\_ Score : \_\_\_\_\_

Teacher : \_\_\_\_\_ Date : \_\_\_\_\_

Measuring in Inches

How many Inches ?



\_\_\_\_\_



\_\_\_\_\_



\_\_\_\_\_



\_\_\_\_\_



\_\_\_\_\_



\_\_\_\_\_



\_\_\_\_\_



\_\_\_\_\_

Name : \_\_\_\_\_

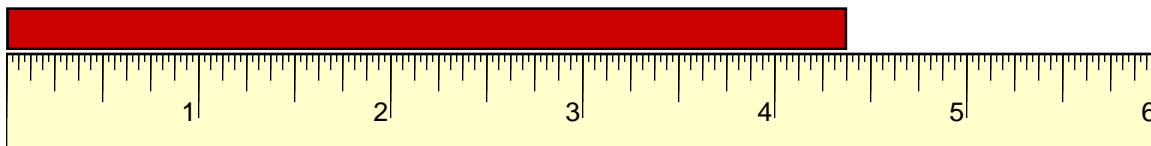
Score : \_\_\_\_\_

Teacher : \_\_\_\_\_

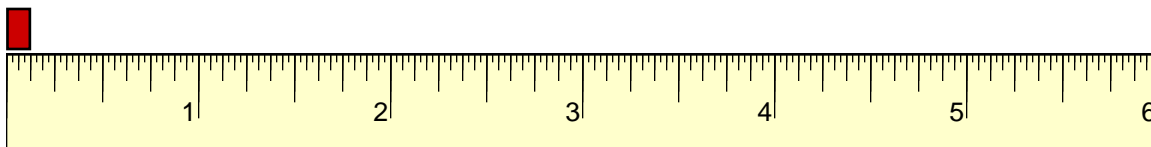
Date : \_\_\_\_\_

## Measuring in Inches

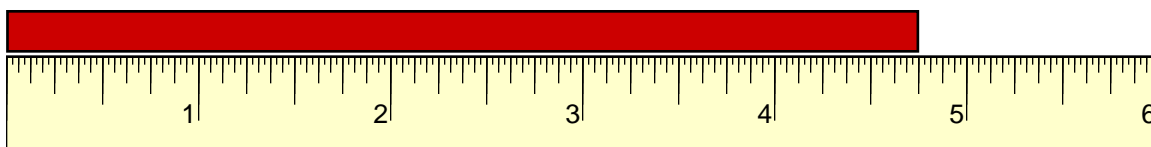
How many Inches ?



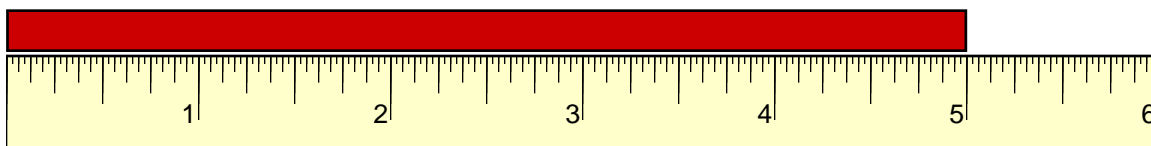
4  $\frac{3}{8}$  in



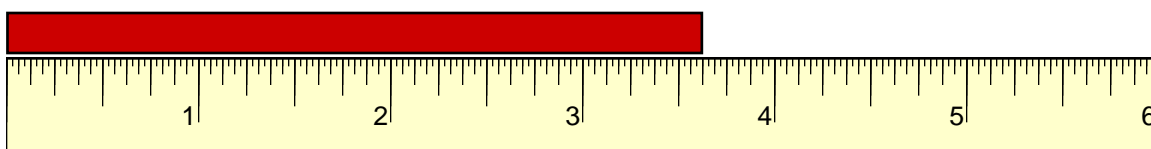
1  $\frac{1}{8}$  in



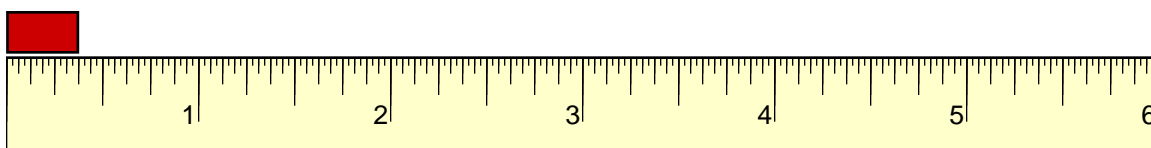
4  $\frac{3}{4}$  in



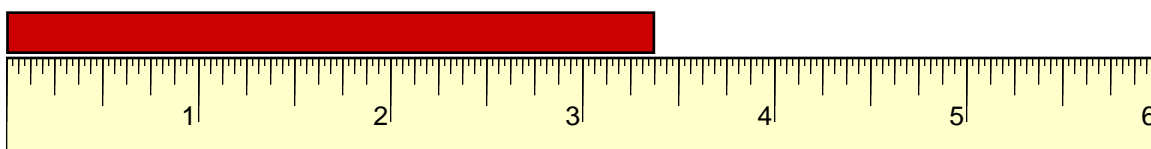
5 in



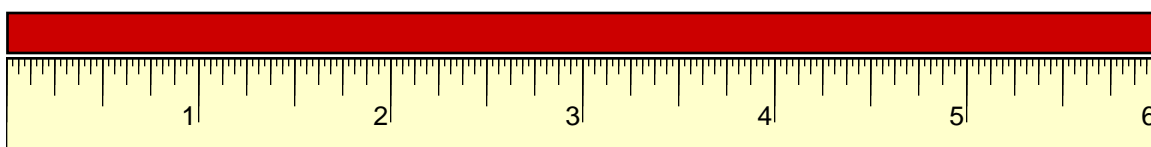
3  $\frac{5}{8}$  in



3  $\frac{3}{8}$  in



3  $\frac{3}{8}$  in



6 in

